

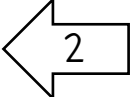

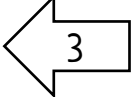


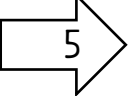

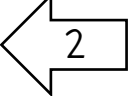


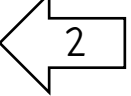

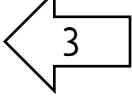

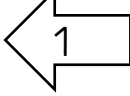

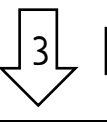
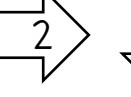
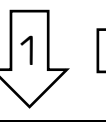
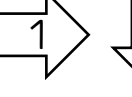
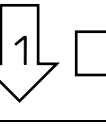
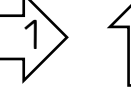
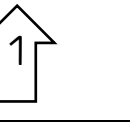



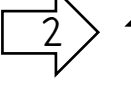
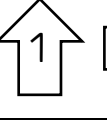
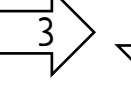
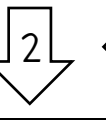
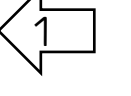

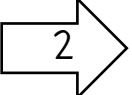

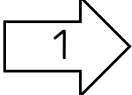

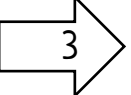

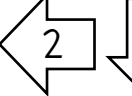
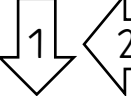
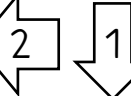
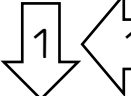
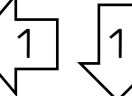

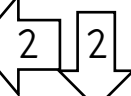
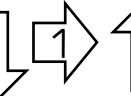
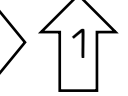

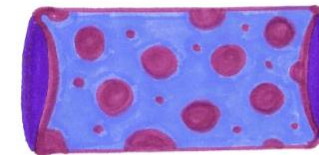


# Meerschweinchengehege - Orientierung im Raum 1

Wo landet dein Meerschweinchen? - Verbinde!

a)											
b)											
c)											
d)											
e)											
f)											
g)											





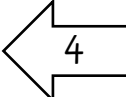

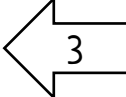


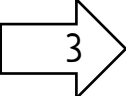
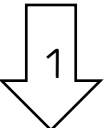
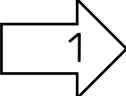


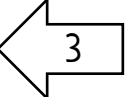
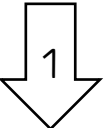
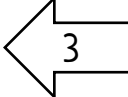

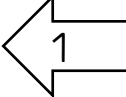


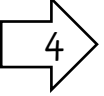
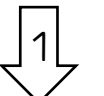
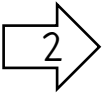





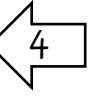

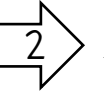

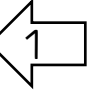

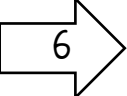

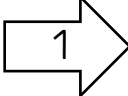

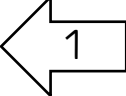


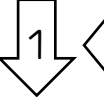
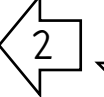
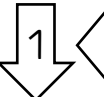
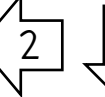
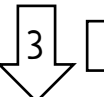
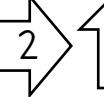
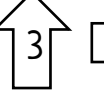
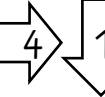
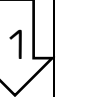
# Meerschweinchengehege – Orientierung im Raum 2

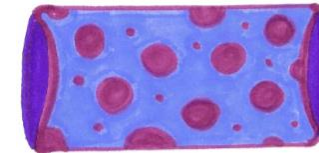

Finde den **kürzesten** Weg für dein Meerschweinchen! – Schreibe auf!

a)		
b)		
c)		
d)		
e)		
f)		
g)		

# Meerschweinchengehege - Orientierung im Raum 7

Wo landet dein Meerschweinchen? - Verbinde!

a)											
b)											
c)											
d)											
e)											
f)											
g)											



## Meerschweinchengehege – Orientierung im Raum 8

Finde einen Weg für dein Meerschweinchen! Gibt jeweils genau 6 Richtungsangaben – Schreibe auf!

a)		
b)		
c)		
d)		
e)		
f)		
g)		

## Meerschweinchengehege – Orientierung im Raum 9

Finde einen Weg für dein Meerschweinchen! Gibt jeweils genau 7 Richtungsangaben – Schreibe auf!

a)		
b)		
c)		
d)		
e)		
f)		
g)		